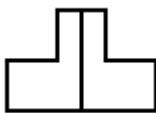



Count by fives. Fill in the missing number.

- | |
|---|
| 1.
331, 326, 321, 316, _____, 306, 301, 296, _____ |
| 2.
_____, 381, _____, 391, 396, 401, 406, _____, 416 |
| 3.
529, 524, 519, _____, _____, 504, 499, 494, _____ |

Color one part. Circle the fraction.

<p>4.</p> <div style="text-align: center;">  </div> <div style="display: flex; justify-content: space-around; margin-top: 20px;"> <div style="text-align: center;">$\frac{1}{2}$</div> <div style="text-align: center;">$\frac{1}{3}$</div> <div style="text-align: center;">$\frac{1}{4}$</div> </div>	<p>5.</p> <div style="text-align: center;">  </div> <div style="display: flex; justify-content: space-around; margin-top: 20px;"> <div style="text-align: center;">$\frac{1}{2}$</div> <div style="text-align: center;">$\frac{1}{3}$</div> <div style="text-align: center;">$\frac{1}{4}$</div> </div>
---	---





September:

S	M	T	W	T	F	S
			1	2	3	4
5	6	7	8	9	10	11
12	13	14	15	16	17	18
19	20	21	22	23	24	25
26	27	28	29	30		

Use the calendar of **September** to answer the questions.

- | | |
|--|---|
| <p>6. Siva will go to the doctor in 5 days. Today is September 1. What is the date of her visit?</p> | <p>7. The criminal will have his trial in 6 days. Today is September 6. What date is his trial?</p> |
|--|---|

Write the time.

<p>8.</p> <div style="text-align: center;">  </div> <p style="text-align: center;">___ : ___</p>	<p>9.</p> <div style="text-align: center;">  </div> <p style="text-align: center;">___ : ___</p>	<p>10.</p> <div style="text-align: center;">  </div> <p style="text-align: center;">___ : ___</p>	<p>11.</p> <div style="text-align: center;">  </div> <p style="text-align: center;">___ : ___</p>
---	---	---	--