




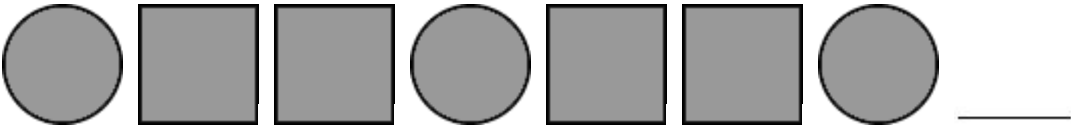
**Select the shape that comes next in the pattern.**

1. 



---

**(A)**       **(B)** 

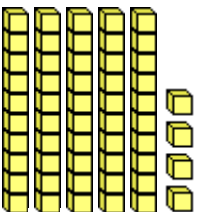
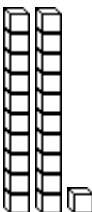
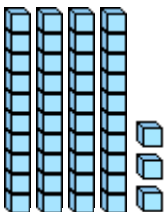
**Select the shape that comes next in the pattern.**

2. 

---

**(A)**       **(B)** 

**Count and then write the tens and ones.**

<p>3. </p> <p>___ tens      ___ ones</p> <p>Write the number: _____</p>	<p>4. </p> <p>___ tens      ___ one</p> <p>Write the number: _____</p>	<p>5. </p> <p>___ tens      ___ ones</p> <p>Write the number: _____</p>
---	--	---

**Solve.**

<p>6. Mom let Thomas play outside with his friends. He played for 36 minutes before dinner and 39 minutes after dinner. How many minutes in total did Thomas play?</p> <p>_____ minutes</p>	<p>7. My grandfather raises sheep. He has 43 sheep in his flock. There are 19 white sheep and the rest are black. How many black sheep are there?</p> <p>_____ black sheep</p>
---	--

**Complete the number pattern. Solve the question and write your answer.**

8. 

<b>Babies</b>	1	2	3	4
<b>Toes</b>	10	20	30	

How many total toes do **4** babies have?

\_\_\_\_\_ toes